

NEW AL WUROOD INTERNATIONAL SCHOOL, JEDDAH  
(PEEVEES SCHOOLS, K.S.A.)  
Affiliated to CBSE – New Delhi



EVALUATION - 3 (2016 – 2017)

Subject: Social Science

Set: A

\_\_\_\_\_  
Invigilator's Signature

Date: 01-03-2017

Time: 2 Hours

Class: III Sec: \_\_\_\_\_

Max. Marks: 50

Name: \_\_\_\_\_

Roll No.: \_\_\_\_\_

SECTION	A	B	C	D	TOTAL MARKS
MAX.MARKS	20	30	-	-	50
MARKS OBTAINED			-	-	
MARKS AFTER SCRUTINY			-	-	

\_\_\_\_\_  
Examiner's Signature

\_\_\_\_\_  
Scrutinizer's Signature

**Instructions to the Candidates:**

1. Please check that this question paper contains all the printed pages.
2. All answers must be written in the space provided.
3. Write neatly and legibly.
4. Do not leave the examination hall without handing over the answer paper to the invigilator.

**SECTION – A**

**I. Choose the correct answer:**

**3**

1. We call the shape of the earth as  
a) square                      b) sphere      c) rectangle
2. A person who travels to space is called  
a) surgeon                      b) robot                      c) astronaut
3. The early humans invented the  
a) car                      b) earth                      c) wheel
4. \_\_\_\_\_ was used in earlier times carried by men as a transport.  
a) rocket      b) palanquin      c) bullet train
5. The early humans worshipped  
a) nature      b) god                      c) people
6. This kind of transport depends on engines:  
a) palanquin                      b) Horse carriage                      c) Auto rickshaw

**II. Fill in the blanks:**

**5**

1. The top most point of the earth is called the \_\_\_\_\_.
2. The early humans used \_\_\_\_\_ as clothes.
3. The \_\_\_\_\_ helped the early humans to carry heavy loads.
4. A machine that can help things to move is called an \_\_\_\_\_.
5. \_\_\_\_\_ proved that the earth was round like a ball.

**III. Name the following:**

**2**

1. Car that runs on sun's energy

\_\_\_\_\_

2. Things used for work like cutting and mixing

\_\_\_\_\_

3. The tools used by the early humans

\_\_\_\_\_

4. The early humans lived in.

\_\_\_\_\_

**IV. Write whether the following statements are True or False:**

**2**

1. Wheels used in vehicles are made of different shapes. (            )
2. The early humans used pots for decoration.        (            )
3. The early humans used stones and bones of animals as weapons. (            )
4. Metro train is an ancient mode of transportation.        (            )

**V. Match the following:**

**3**

- |                        |                                 |
|------------------------|---------------------------------|
| 1. Palanquin           | vehicle pulled by the animals   |
| 2. Neil Armstrong      | bullock cart                    |
| 3. Weapons             | carried by men in earlier times |
| 4. An oldest transport | astronaut                       |
| 5. Sledges             | tools                           |
| 6. Sun light           | plants                          |

**VI. Give two examples for each of the following**

**5x1=5**

1. Animals used as mode of transportation.  
\_\_\_\_\_, \_\_\_\_\_
2. Early humans used to cross the river.  
\_\_\_\_\_, \_\_\_\_\_
3. Any two modern vehicles used.  
\_\_\_\_\_, \_\_\_\_\_
4. Clothes used by early humans.  
\_\_\_\_\_, \_\_\_\_\_
5. Food of early humans.  
\_\_\_\_\_, \_\_\_\_\_



## SECTION - B

VII. Answer the following in one or two sentences

5x1=5

1. What is a globe?

Ans: \_\_\_\_\_

2. Why did early humans use stone tools?

Ans: \_\_\_\_\_

3. Why did early humans called as "Hunters and Gatherers"?

Ans: \_\_\_\_\_

4. How did people travell in earlier times?

Ans: \_\_\_\_\_

5. How did early humans begin to grow crops?

Ans: \_\_\_\_\_

VIII. Identify the following pictures and write two or three sentences about

each:

5x2=10

1.




---

---

---

---

2.




---

---


---

---

3.



5.



---

---

---

---

---

**IX. Answer the following in three or four sentences:**

**5x3=15**

1. Why do people travel?

---

---

---

---

---

---

---

---


---

---

---

---

4.





2. Why did early humans use different types of tools after they started farming?

---

---

---

---

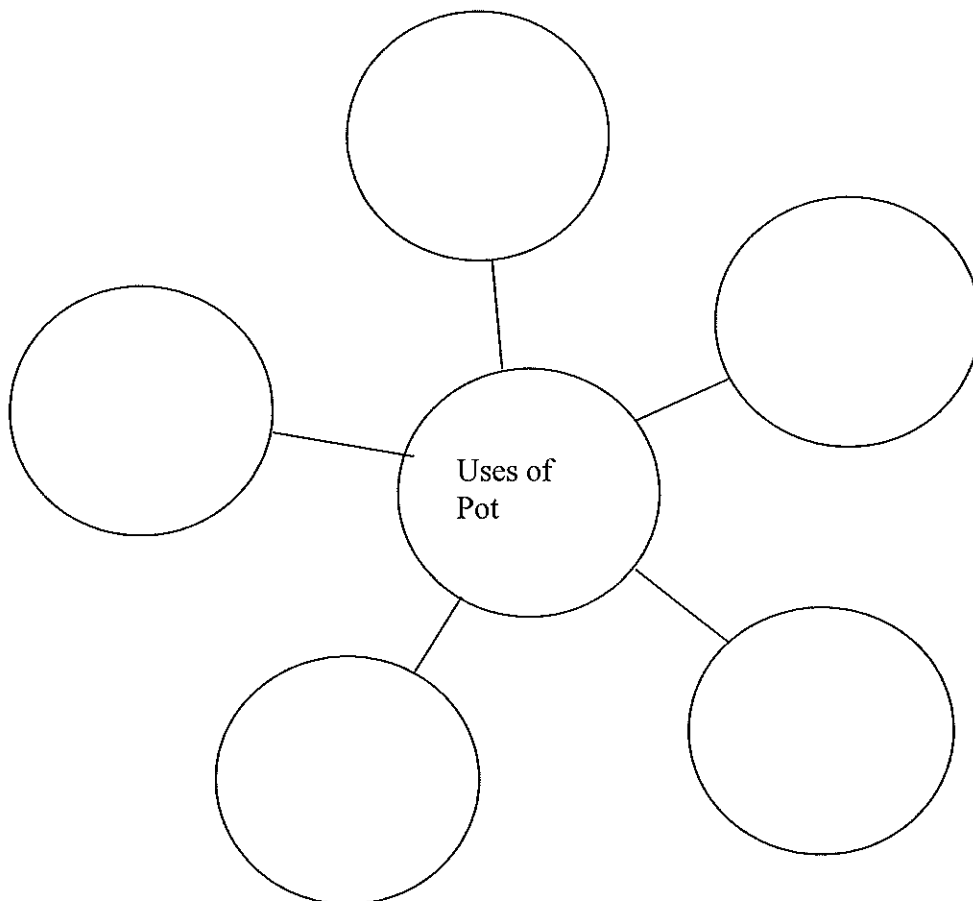
---

---

---

---

3. Write the uses of pots.



4. Kopu was an early human who lived in a mud hut with his family. They wore animal skins for clothes and grew grains as food. They used clay pots to store grains and water. Write about two similarities and two differences between Kopu's life and yours.

Ans:

Similarities: \_\_\_\_\_

---

---

---

Differences: \_\_\_\_\_

---

---

---

---

5. The moon is round in shape but why do we not see it round every day?

Ans:

---

---

---

---

---

---

---



66 copies