



**NEW AL WUROOD INTERNATIONAL SCHOOL JEDDAH.**

**B.E.S.T. Group of Schools, K.S.A.**

Affiliated to CBSE – New Delhi, Affiliation No: 5730008

**EVALUATION -2 (2021-22')**

**Subject: Science Worksheet No.1**

Date:/03/2022

Class:3

---

I- Fill in the blanks.

1. Candle fume is an example \_\_\_\_\_ form of material
2. Earth rotate on its own \_\_\_\_\_.
3. When solid form changes into a gas without becoming liquid is called \_\_\_\_\_.
4. Water body present in the middle of desert is \_\_\_\_\_.
5. The most fertile part of the earth is \_\_\_\_\_.

II- Match the given words with the picture.

1. Chulha

A



2. Earth's axis

B



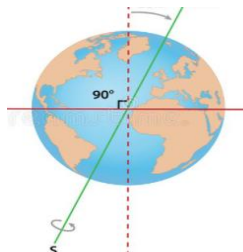
3. Bricks

C




4. Phases of moon

D



5. Incense sticks

E



III. Identify the true or false statement and rewrite the correct statement.

1. Sun revolves around the earth.

---

2. Water above the surface is called groundwater.

---

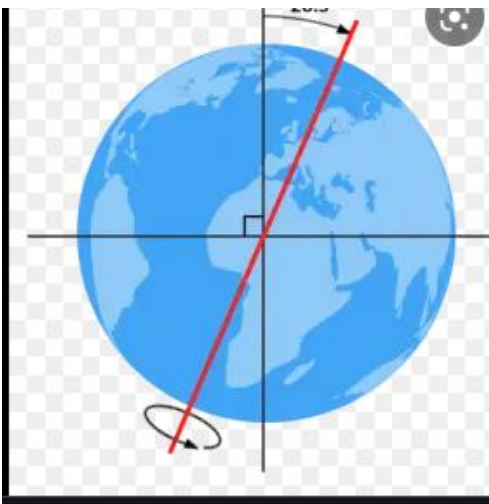
3. Changes of water into gas on boiling is called evaporation.

---

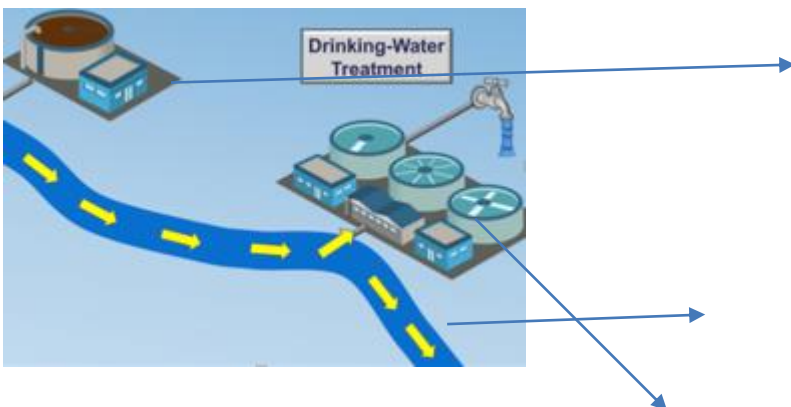
4. Bedrock layer of the earth is a fertile part of the soil.

---

II. Identify the figure and label the parts and write a short note.



B.



III. Give a reason for the following questions.

1. Is sand a solid, liquid, or gas? Give a reason for your answer.

---

---

---

2. Why is soil precious? Why should we save it?

---

---

---

3. Why can't see every day the same moon?

---

---

---

4. When we see full moon India will people in America all see the full moon? If not why do we think so?

---

---

---

5. Does Earth rotate on its own axis and at the same time it revolves around the sun?

---

---

---

6. Why do we think that earth is not flat?

---

---

---

IV. Answer in one word?

1. The movement of the earth on its own axis is called?

---

2. The changes from solid to liquid upon heating are called?

---

3. Hand pump and well are the examples of which water?

---

4. The change of a liquid into a solid for upon cooling called?

---

5. The change of gaseous form into liquid upon cooling is called?

---

VII Answer the following in one or two sentences.

1. Write the properties of liquid?

---

---

---

2. Write the properties of gas?

---

---

---

3. What is the difference between condensation and evaporation?

---

---

---

4. What is weathering of rock?

---

---

---

5. How would you prove that soil contains air in it?

---

---

---