



# NEW AL WUROOD INTERNATIONAL SCHOOL, JEDDAH, K.S.A

Affiliated to CBSE – New Delhi, Affiliation No. 5730008

## WORKSHEET -1

ANNUAL EXAMINATION/EVALUATION 2: 2021-22

GRADE: 1

SUBJECT: MATHEMATICS

### 1-Think addition to subtraction sentences:

$20 - 15 =$

$12 - 6 =$


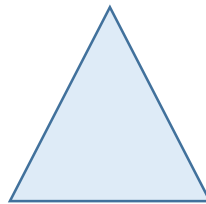

$10 - 7 =$

$18 - 17 =$

$11 - 4 =$

$9 - 3 =$

### 2-Fill in the blanks:



A square has ----sides  
and -----corners.

A triangle has ----  
sides and -----corners.

A circle has ----sides  
and -----corners.

### 3-Write whether the given below activities are during day time or night time:



### 4-Complete the number pattern:

5

10

15

3

6

9

2

4

6