

NEW AL WUROOD INTERNATIONAL SCHOOL, JEDDAH, K.S.A

Affiliated to CBSE – New Delhi, Affiliation No. 5730008



FIRST TERM EXAMINATION/EVALUATION 1-June,2022-23

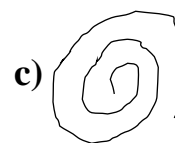
WORKSHEET: 1

GRADE: 1

SUBJECT: MATHS

I. Choose the correct answer:

1. Circle the curved line.



2. Circle the square.




3. A circle has _____ sides.

a) 4

b) 3

c) 0

4. How many circles are there in the picture?



a) 3

b) 5

c) 6

5. $3 + 2 =$ _____

a) 5

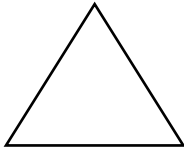
b) 6

c) 4

II. Match the following:



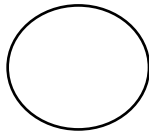
Circle



Rectangle

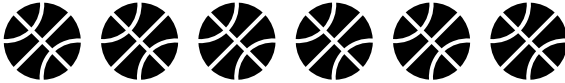


Square





Triangle

III. Fill in the blanks:

1. There are _____ balls. 
2. The rectangle has _____ sides.
3. $3 + 4 =$ _____.

4.  +  = _____

IV. Answer the following:

1.  and 
_____ ants and _____ ant is _____ cats altogether.

2. Name 2 shapes that has 4 sides and 4 corners.

1. _____

2. _____

3. Complete the table :

Object	Roll	Slide	Both roll and slide
Ball			
Sharpner			
Coin			

4. Name 2 solid shapes.

1. _____

2. _____

5. Add:

$$\begin{array}{r} 5 \\ + 4 \\ \hline \end{array}$$

$$\begin{array}{r} 4 \\ + 6 \\ \hline \end{array}$$

6. Create a story problem for $3 + 2 = 5$.

X-----X-----X