

NEW AL WUROOD INTERNATIONAL SCHOOL, JEDDAH, K.S.A

Affiliated to CBSE – New Delhi



Subject: EVS
Block-20 Uses of water
REVISION WORKSHEET

Name: _____ Class: 1 Sec: _____ Date: _____

I. Write True or False.

1. We need water for drinking - _____
2. Water is very valuable - _____
3. Animals do not need water to live - _____

II. Answer the following:

1. Write 2 uses of water outside the house.

2. Write 2 ways in which we use water at home.

III. Draw how a plant will look after a week if you forget to water it.

A large empty rectangular box with a black border, intended for a drawing of a wilted plant.



NEW AL WUROOD INTERNATIONAL SCHOOL, JEDDAH

Affiliated to CBSE – New Delhi

Subject: EVS
Block 21- We need air
REVISION WORKSHEET

I. Fill in the blanks

Space	water	everywhere	fire
-------	-------	------------	------

1. Air is _____.
2. _____ needs air to burn.
3. Air takes up _____.

II. Look at the picture. What does it tell you about air?



III. Answer the following questions.

1. Write 2 uses of air.

2. What will happen if we put a glass over a burning candle? Why?



NEW AL WUROOD INTERNATIONAL SCHOOL, JEDDAH

Affiliated to CBSE – New Delhi

Subject: EVS

Block-23 A Rainy Day

REVISION WORKSHEET

Name: _____ Class: 1 Sec: _____ Date: _____

I. Complete the sentences:

A. On a rainy day I can hear _____.

B. On a rainy day I can see _____.

II. Answer the following:

1. How does the air feel after it rains?

2. What material are raincoats made of and why?

III. Write two things that you use when it rains. Write the names of the things.



NEW AL WUROOD INTERNATIONAL SCHOOL, JEDDAH

Affiliated to CBSE – New Delhi

Subject: EVS- Block_24- Weather and Seasons

REVISION WORKSHEET

I. True or False:





1. Weather and seasons are the same- _____
2. During summers the days are hot- _____
3. We wear warm clothes during winter- _____

II. Answer the following:

1. Name the five seasons of the year.

2. Write two changes that you see at home when the winter season begins.

III. Use the weather chart to answer the questions.

Sunday 2 Feb 2019	Monday 2 Feb 2019	Tuesday 3 Feb 2019	Wednesday 4 Feb 2019
			

- A. Which two days had the same weather? How was the weather?**

- B. How was the weather on Tuesday?**
