



WORK SHEET-1
GRADE:1
EVALUATION-3 2018-19
SUBJECT: M A T H E M A T I C S

I. Write the number names

1.

75 - _____

2.

12 - _____

3.

48 - _____





4.

39 - _____

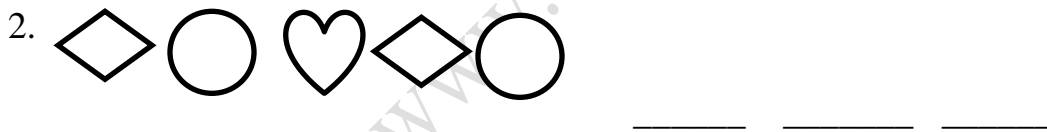
II. Write a story problem to show 16-4?

III. C

complete the table .

Sr.No	Shape	Number of Sides	Number of Corners
1			
2			
3			
4			

IV. Draw next three shapes .



V.Solve the following:

a) $12-4 =$

b) $10-2 =$

c) $10+9 =$

d) $15-5 =$

e) $6+7 =$

f) $11+6 =$