



B.E.S.T. Group Of Schools, Saudi Arabia

Class:5

Worksheet - 1

Subject:Science

Examination:Evaluation-1(2018)

Section-A

A. Choose the best answer :

1. Rice is a _____

- a. Dicot b. Plumule c. Monocot

2. _____ has buds on the edges of leaves.

- a. Hibiscus b. Bryophyllum c. Poppy

3. The natural environment in which an animal lives is called as _____

- a. Adaptation b. Body covering c. Habitat

4. Ball and Socket is a _____

- a. Movable joint b. Arthritis c. Immovable joint

5. In an accident, _____ gets damaged and causes loss of memory.

- a. Cerebellum b. Cerebrum c. Brain stem

B. Fill in the blanks:

1. The nerves which carry messages from different parts of the body to the brain are called _____

2. Joints are filled with a _____ which acts as a cushion between two bones.

3. Insects breathe through their _____

4. _____ have a fibrous outer covering which helps them to float in water.

5. _____ is not a necessary factor for germination.

C. Match the following:

- | | |
|-------------------|-------------|
| 1. Baby plant | penguin |
| 2. Seed dispersal | embryo |
| 3. Pivot joint | spinal cord |
| 4. Back bone | neck |
| 5. Flippers | tomato |

D. Write one word answers:

1. Which is the organ of movement for fish?

2. Which part grows to form the root of the plant?

3. What is the phenomenon of scattering away of seeds?

4. Name the disease caused to sportspersons due to over usage of joints?

5. Name the actions which are not under our control and happen automatically.

E. Scramble using the clues:

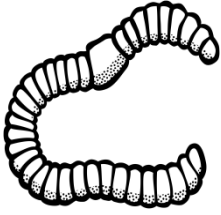
- | | | |
|--------------------|-------|-----------------------|
| 1. m h l u i | _____ | (a scar) |
| 2. m x n h a u i t | _____ | (hook) |
| 3. s i l g l | _____ | (breathing organ) |
| 4. u s m t i s u l | _____ | (automatic response) |
| 5. l k u s l | _____ | (brain) |

Section-B

F. Draw and label the following:

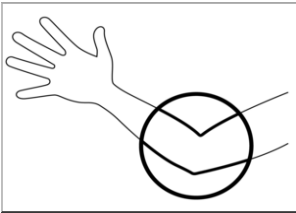
a. Cotyledon	
b. Human Brain	
c. Fish	

G .Identify and write about the following:

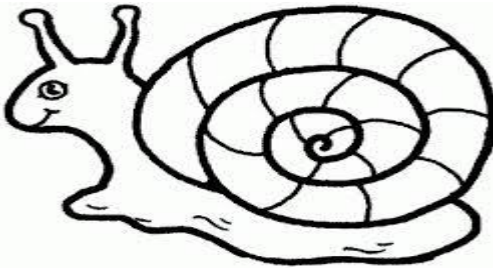


a.


b.



c.



d.



e.



Section-C

H. Answer the following :

1. How are radical and plumule different from each other?

2. How do different varieties of plants reach different parts of the world ? Give an example.

3. How does our brain control and co ordinate the working of our body ?

4. Why do we need to take care of joints? How can we take care of our joints?

5. Why do dolphins frequently pop out of water?
